



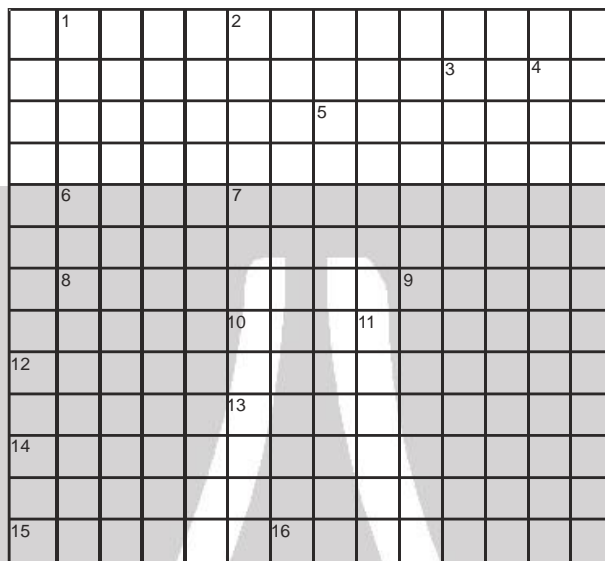
Note : \*\* Problems require knowledge of quantities from the syllabus of class XII.

## Exercise-1

Marked Questions can be used as Revision Questions.

### PART - I : SUBJECTIVE QUESTIONS

\*\*1. Complete the cross word :



Across

Down

- |   |  |
|---|--|
| 1. Unit of pressure $\frac{N}{m^2} =$ .....(6)  | 1. $10^{-12} m =$ One .....(9)   |
| 3. Unit of a physical quantity whose dimension is $M^1L^2T^{-3}$ .....(4)                                     | 2. A unit of length measures atomic distances .....(8)   |
| 6. Unit of conductance $\left( = \frac{1}{\text{Resistance}} \right)$ which is equivalent to Siemens .....(3) | 3. Unit of magnetic flux .....(5)  |
| 7. A quantity whose dimension is same as that of energy. ....(6)  | 4. Unit of magnetic field .....(5)   |
| 8. A unit of pressure (1mm of Hg pressure) .....(4)   | 5. A unit of distance that is equal to $3.08 \times 10^{16}m$ , and is used to measure astronomical distances .....(6) |
| 10. Abbreviation used for $10^{-6}$ .....(5)  | 9. Number of particles is expressed in.....(4)   |
| 12. Nuclear distances are measured in .....(5)  | 11. Unit of a physical quantity which is dimensionless .....(6)  |
| 13. Unit of luminous intensity .....(7)   | 12. Unit of capacitance .....(5)   |
| 14. Angular speed of a fan is usually written in .....(3)   |  |
| 15. $erg/cm =$ .....(4)   |  |
| 16. Unit of inductance .....(5)   |  |





2. If the velocity of light 'c', Gravitational constant 'G' & Plank's constant 'h' be chosen as fundamental units, find the dimensions of mass, length & time in this new system .

3. Test if the following equations are dimensionally correct :

$$(a) s = \frac{\rho r g h}{\cos \theta} \quad (b) v = \sqrt{\frac{\gamma R T}{M_0}} \quad (c) V = \frac{P r^4 t}{\eta \ell} \quad (d) f = \sqrt{\frac{m g \ell}{I}}$$

where h = height, S = surface tension, v = Speed of sound,  $\rho$  = density, P = pressure, V = volume,  $\eta$  = coefficient of viscosity, f = frequency and I = moment of inertia.

## PART - II : ONLY ONE OPTION CORRECT TYPE

- Which of the following sets can't enter into the list of fundamental quantities in any system of units?  
(A) length, mass and velocity (B) length, time and velocity  
(C) mass, time and velocity (D) length, time and mass
- A dimensionless quantity  
(A) never has a unit (B) always has a unit (C) may have a unit (D) does not exist
- A unit less quantity  
(A) never has a nonzero dimension (B) always has a nonzero dimension  
(C) may have a nonzero dimension (D) does not exist
- Which pair of following quantities has dimensions different from each other.  
(A) Impulse and linear momentum (B) Plank's constant and angular momentum  
(C) Moment of inertia and moment of force (D) Young's modulus and pressure
- The velocity of water waves may depend on their wavelength  $\lambda$ , the density of water  $\rho$  and the acceleration due to gravity g. The method of dimensions gives the relation between these quantities as  
(A)  $v^2 = k \lambda^{-1} g^{-1} \rho^{-1}$  (B)  $v^2 = k g \lambda$  (C)  $v^2 = k g \lambda \rho$  (D)  $v^2 = k \lambda^3 g^{-1} \rho^{-1}$   
where k is a dimensionless constant
- The value of  $G = 6.67 \times 10^{-11} \text{ N m}^2 (\text{kg})^{-2}$ . Its numerical value in CGS system will be :  
(A)  $6.67 \times 10^{-8}$  (B)  $6.67 \times 10^{-6}$  (C) 6.67 (D)  $6.67 \times 10^{-5}$
- Force applied by water stream depends on density of water ( $\rho$ ), velocity of the stream (v) and cross-sectional area of the stream (A). The expression of the force can be  
(A)  $\rho A v$  (B)  $\rho A v^2$  (C)  $\rho^2 A v$  (D)  $\rho A^2 v$
- If unit of length and time is doubled, the numerical value of 'g' (acceleration due to gravity) will be :  
(A) doubled (B) halved (C) four times (D) remain same



## PART - III : MATCH THE COLUMN

1. Match the following :

Physical quantity	Dimension	Unit
(1) Gravitational constant 'G'	(P) $M^1 L^1 T^{-1}$	(a) N.m
(2) Torque	(Q) $M^{-1} L^3 T^{-2}$	(b) N.s
(3) Momentum	(R) $M^1 L^{-1} T^{-2}$	(c) $Nm^2/kg^2$
(4) Pressure	(S) $M^1 L^2 T^{-2}$	(d) pascal

2\*\*. Match the following :

Physical quantity	Dimension	Unit
(1) Stefan's constant ' $\sigma$ '	(P) $M^1 L^1 T^{-2} A^{-2}$	(a) $W/m^2$
(2) Wien's constant 'b'	(Q) $M^1 L^0 T^{-3} K^{-4}$	(b) K.m.
(3) Coefficient of viscosity ' $\eta$ '	(R) $M^1 L^0 T^{-3}$	(c) tesla .m/A
(4) Emissive power of radiation (Intensity emitted)	(S) $M^0 L^1 T^0 K^1$	(d) $W/m^2.K^4$
(5) Mutual inductance 'M'	(T) $M^1 L^2 T^{-2} A^{-2}$	(e) poise
(6) Magnetic permeability ' $\mu_0$ '	(U) $M^1 L^{-1} T^{-1}$	(f) henry

## Exercise-2

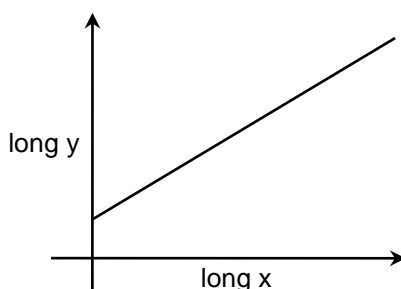
Marked Questions can be used as Revision Questions.

### PART - I : ONLY ONE OPTION CORRECT TYPE

1. Force  $F$  is given in terms of time  $t$  and distance  $x$  by  $F = A \sin C t + B \cos Dx$ . Then the dimensions of  $\frac{A}{B}$  and  $\frac{C}{D}$  are given by  
 (A)  $MLT^{-2}, M^0 L^0 T^{-1}$  (B)  $MLT^{-2}, M^0 L^{-1} T^0$  (C)  $M^0 L^0 T^0, M^0 L^1 T^{-1}$  (D)  $M^0 L^1 T^{-1}, M^0 L^0 T^0$
2. What are the dimensions of electrical resistance?  
 (A)  $ML^2 T^{-2} A^2$  (B)  $ML^2 T^{-3} A^{-2}$  (C)  $ML^2 T^{-3} A^2$  (D)  $ML^2 T^{-2} A^{-2}$
3.  $\int \frac{x dx}{\sqrt{2ax - x^2}} = a^n \sin^{-1} \left[ \frac{x}{a} - 1 \right]$ . The value of  $n$  is :  
 (A) 0 (B) -1 (C) 1 (D) none of these  
 You may use dimensional analysis to solve the problem.
4. An unknown quantity " $\alpha$ " is expressed as  $\alpha = \frac{2ma}{\beta} \log \left( 1 + \frac{2\beta \ell}{ma} \right)$  where  $m$  = mass,  $a$  = acceleration,  $\ell$  = length. The unit of  $\alpha$  should be  
 (A) meter (B) m/s (C)  $m/s^2$  (D)  $s^{-1}$
5. A quantity  $\alpha$  is defined as  $\alpha = \frac{e^2}{4\pi\epsilon_0 c \hbar}$ , where  $e$  is electric charge,  $\hbar = \frac{h}{2\pi}$  is the reduced Planck's constant and  $c$  is the speed of light. The dimensions of  $\alpha$  are  
 (A)  $[M^0 L^0 T^0 I^0]$  (B)  $[M^1 L^{-1} T^2 I^{-2}]$  (C)  $[M^2 L^1 T^{-1} I^0]$  (D)  $[M^0 L^3 T^{-1} I^{-2}]$  [Olympiad (State-1) 2017]



6. The equation correctly represented by the following graph is (a and b are constants)



[Olympiad (State-1) 2017]

- (A)  $x + y = b$  (B)  $ax^2 + by^2 = 0$  (C)  $x + y = ab$  (D)  $y = ax^b$

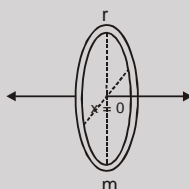
7. The physical quantity that has unit volt-second is

[Olympiad (State-1) 2017]

- (A) energy (B) electric flux (C) magnetic flux (D) inductance

## PART - II : SINGLE AND DOUBLE VALUE INTEGER TYPE

1. In the formula;  $p = \frac{nRT}{V-b} e^{-\frac{a}{RTV}}$ , find the dimensions of 'a' and 'b', where p = pressure, n = no. of moles, T = temperature, V = volume and R = universal gas constant.
2. A particle is performing SHM along the axis of a fixed ring. Due to gravitational force, its displacement at time t is given by  $x = a \sin \omega t$ .



In this equation  $\omega$  is found to depend on radius of the ring (r), mass of the ring (m) and gravitational constant (G). Using dimensional analysis, find the expression of  $\omega$  in terms of m, r and G.

## PART - III : ONE OR MORE THAN ONE OPTIONS CORRECT TYPE

1. Choose the correct statement(s):
- (A) All quantities may be represented dimensionally in terms of the base quantities.
- (B) A base quantity cannot be represented dimensionally in terms of the rest of the base quantities.
- (C) The dimension of a base quantity in other base quantities is always zero.
- (D) The dimension of a derived quantity is never zero in any base quantity.
2. Choose the correct statement(s) :
- (A) A dimensionally correct equation may be correct.
- (B) A dimensionally correct equation may be incorrect.
- (C) A dimensionally incorrect equation may be correct.
- (D) A dimensionally incorrect equation must be incorrect.



3. A parameter  $\alpha$  is given by  $\alpha = \frac{h}{\sigma \theta^4}$

(here  $\sigma$  = Stefan's constant,  $h$  = Planck's constant,  $\theta$  = absolute temperature) then

(A) Dimension of ' $\alpha$ ' will be  $L^2 T^2$

(B) Unit of ' $\alpha$ ' may be  $m^2 s^2$

(C) Unit of ' $\alpha$ ' may be  $\frac{(\text{Weber})(\Omega)^2 (\text{Farad})^2}{(\text{Tesla})}$

(D) Dimension of ' $\alpha$ ' will be equal to dimension of  $\left( \frac{R i}{\phi_m} \right)$  where  $R$  = gas constant,  $i$  = Electrical current,

$\phi_m$  = magnetic flux

## PART - IV : COMPREHENSION

### Comprehension

The Vander waal equation for 1 mole of a real gas is  $\left( P + \frac{a}{V^2} \right) (V - b) = RT$  where  $P$  is the pressure,  $V$  is the volume,  $T$  is the absolute temperature,  $R$  is the molar gas constant and  $a$ ,  $b$  are Vander waal constants.

1. The dimensions of  $a$  are the same as those of  
 (A)  $PV$  (B)  $PV^2$  (C)  $P^2V$  (D)  $P/V$
2. The dimensions of  $b$  are the same as those of  
 (A)  $P$  (B)  $V$  (C)  $PV$  (D)  $nRT$
3. The dimensional formula for  $ab$  is  
 (A)  $ML^2 T^{-2}$  (B)  $ML^4 T^{-2}$  (C)  $ML^6 T^{-2}$  (D)  $ML^8 T^{-2}$



## Exercise-3

✎ Marked Questions can be used as Revision Questions.

\* Marked Questions may have more than one correct option.

### PART - I : JEE (ADVANCED) / IIT-JEE PROBLEMS (PREVIOUS YEARS)

- 1.\*\* Some physical quantities are given in **Column I** and some possible SI units in which these quantities may be expressed are given in **Column II**. Match the physical quantities in **Column I** with the units in

**Column II.**

[IIT-JEE-2007; 6/184]

Column I	Column II
(A) $G M_e M_s$ G - universal gravitational constant, $M_e$ - mass of the earth, $M_s$ - mass of the Sun	(p) (volt) (coulomb) (metre)
(B) $\frac{3RT}{M}$ R - universal gas constant, T - absolute temperature, M - molar mass	(q) (kilogram) (metre) <sup>3</sup> (second) <sup>-2</sup>
(C) $\frac{F^2}{q^2 B^2}$ F - force, q - charge, B - magnetic field	(r) (metre) <sup>2</sup> (second) <sup>-2</sup>
(D) $\frac{G M_e}{R_e}$ G - universal gravitational constant, $M_e$ - mass of the earth $R_e$ - radius of the earth	(s) (farad) (volt) <sup>2</sup> (kg) <sup>-1</sup>

- 2.✎ Match List I with List II and select the correct answer using the codes given below the lists :

List I				
P.	Boltzmann constant			
Q.	Coefficient of viscosity			
R.	Planck constant			
S.	Thermal conductivity			

**Codes :**

	P	Q	R	S
(A)	3	1	2	4
(B)	3	2	1	4
(C)	4	2	1	3
(D)	4	1	2	3

List II	
1.	$[ML^2T^{-1}]$
2.	$[ML^{-1}T^{-1}]$
3.	$[MLT^{-3}K^{-1}]$
4.	$[ML^2T^{-2}K^{-1}]$

[JEE (Advanced) 2013; 4/60]



3. To find the distance  $d$  over which a signal can be seen clearly in foggy conditions, a railways engineer uses dimensional analysis and assumes that the distance depends on the mass density  $\rho$  of the fog, intensity (power/area)  $S$  of the light from the signal and its frequency  $f$ . The engineer find that  $d$  is proportional to  $S^{1/n}$ . The value of  $n$  is: [JEE (Advanced) 2014, P-1, 3/60]
- 4.\* Planck's constant  $h$ , speed of light  $c$  and gravitational constant  $G$  are used to form a unit of length  $L$  and a unit of mass  $M$ . Then the correct option(s) is (are) [JEE (Advanced) 2015 ; P-1, 4/88, -2]  
 (A)  $M \propto \sqrt{c}$  (B)  $M \propto \sqrt{G}$  (C)  $L \propto \sqrt{h}$  (D)  $L \propto \sqrt{G}$
- 5.\* In terms of potential difference  $V$ , electric current  $I$ , permittivity  $\epsilon_0$ , permeability  $\mu_0$  and speed of light  $c$ , the dimensionally correct equation(s) is(are) [JEE (Advanced) 2015 ; P-2, 4/88, -2]  
 (A)  $\mu_0 I^2 = \epsilon_0 V^2$  (B)  $\epsilon_0 I = \mu_0 V$  (C)  $I = \epsilon_0 V$  (D)  $\mu_0 c I = \epsilon_0 V$
6. Consider an expanding sphere of instantaneous radius  $R$  whose total mass remains constant. The expansion is such that the instantaneous density  $\rho$  remains uniform throughout the volume. The rate of fractional change in density  $\left(\frac{1}{\rho} \frac{d\rho}{dt}\right)$  is constant. The velocity  $v$  of any point on the surface of the expanding sphere is proportional to [JEE (Advanced) 2017; P-2, 3/61, -1]  
 (A)  $R^3$  (B)  $R$  (C)  $R^{2/3}$  (D)  $1/R$

### PARAGRAPH "X"

In electromagnetic theory, the electric and magnetic phenomena are related to each other. Therefore, the dimensions of electric and magnetic quantities must also be related to each other. In the questions below,  $[E]$  and  $[B]$  stand for dimensions of electric and magnetic fields respectively, while  $[\epsilon_0]$  and  $[\mu_0]$  stand for dimensions of the permittivity and permeability of free space respectively.  $[L]$  and  $[T]$  are dimensions of length and time respectively. All the quantities are given in SI units.

(There are two questions based on PARAGRAPH "X", the question given below is one of them)

7. The relation between  $[E]$  and  $[B]$  is [JEE (Advanced) 2018; P-1, 3/60, -1]  
 (A)  $[E] = [B] [L] [T]$  (B)  $[E] = [B] [L]^{-1} [T]$  (C)  $[E] = [B] [L] [T]^{-1}$  (D)  $[E] = [B] [L]^{-1} [T]^{-1}$
8. The relation between  $[\epsilon_0]$  and  $[\mu_0]$  is  
 (A)  $[\mu_0] = [\epsilon_0] [L]^2 [T]^{-2}$  (B)  $[\mu_0] = [\epsilon_0] [L]^{-2} [T]^2$  (C)  $[\mu_0] = [\epsilon_0]^{-1} [L]^2 [T]^{-2}$  (D)  $[\mu_0] = [\epsilon_0]^{-1} [L]^{-2} [T]^2$

## PART - II : JEE (MAIN) / AIEEE PROBLEMS (PREVIOUS YEARS)

1. Which of the following units denotes the dimensions  $ML^2/Q^2$ , where  $Q$  denotes the electric charge? [AIEEE-2006, 3/180]  
 (1)  $H/m^2$  (2) Weber (Wb) (3)  $Wb/m^2$  (4) Henry (H)
2. The dimension of magnetic field in M, L, T and C (Coulomb) is given as [AIEEE-2008, 3/105]  
 (1)  $MT^2C^{-2}$  (2)  $MT^{-1}C^{-1}$  (3)  $MT^{-2}C^{-1}$  (4)  $MLT^{-1}C^{-1}$
3. Let  $[\epsilon_0]$  denote the dimensional formula of the permittivity of vacuum. If  $M$  = mass,  $L$  = length,  $T$  = time and  $A$  = electric current, then : [JEE(Main) 2013, 4/120, -1]  
 (1)  $[\epsilon_0] = [M^{-1}L^{-3}T^2A]$  (2)  $[\epsilon_0] = [M^{-1}L^{-3}T^4A^2]$  (3)  $[\epsilon_0] = [M^{-1}L^2T^{-1}A^{-2}]$  (4)  $[\epsilon_0] = [M^{-1}L^2T^{-1}A]$
4. A man grows into a giant such that his linear dimensions increase by a factor of 9. Assuming that his density remains same, the stress in the leg will change by factor of : [JEE (Main) 2017, 4/120, -1]  
 (1)  $\frac{1}{81}$  (2) 9 (3)  $\frac{1}{9}$  (4) 81

## EXERCISE-1

## PART - I

1.

	<sup>1</sup> P	A	S	C	<sup>2</sup> A	L									
	I				N					<sup>3</sup> W	A	<sup>4</sup> T	T		
	C				G		<sup>5</sup> P			E		E			
	O				S		A			B		S			
	<sup>6</sup> M	H	O		<sup>7</sup> T	O	R	Q	U	E		L			
	E				R		S			R		A			
	<sup>8</sup> T	O	R	R	O		E		<sup>9</sup> M						
	R				<sup>10</sup> M	I	C	<sup>11</sup> R	O						
<sup>12</sup> F	E	R	M	I				A	L						
A					<sup>13</sup> C	A	N	D	E	L	A				
<sup>14</sup> R	P	M						I							
A								A							
<sup>15</sup> D	Y	N	E			<sup>16</sup> H	E	N	R	Y					

2.  $[M] = [h^{1/2} \cdot C^{1/2} \cdot G^{-1/2}]$  ;  $[L] = [h^{1/2} \cdot C^{-3/2} \cdot G^{1/2}]$  ;  
 $[T] = [h^{1/2} \cdot C^{-5/2} \cdot G^{1/2}]$

**3.** All are dimensionally correct.

## PART - II

1.	(B)	2.	(C)	3.	(A)
4.	(C)	5.	(B)	6.	(A)
7.	(B)	8.	(A)		

## PART - III

- (1)  $\rightarrow$  (Q)  $\rightarrow$  (c) ; (2)  $\rightarrow$  (S)  $\rightarrow$  (a)  
(3)  $\rightarrow$  (P)  $\rightarrow$  (b) ; (4)  $\rightarrow$  (R)  $\rightarrow$  (d)
- (1)  $\rightarrow$  (Q)  $\rightarrow$  (d) ; (2)  $\rightarrow$  (S)  $\rightarrow$  (b)  
(3)  $\rightarrow$  (U)  $\rightarrow$  (e) ; (4)  $\rightarrow$  (R)  $\rightarrow$  (a)  
(5)  $\rightarrow$  (T)  $\rightarrow$  (f) ; (6)  $\rightarrow$  (P)  $\rightarrow$  (c)

## EXERCISE-2

## PART - I

1. (C)      2. (B)      3. (C)  
4. (A)      5. (A)      6. (D)  
7. (C)

## PART - II

1.  $[a] = \text{ML}^5\text{T}^{-2}\text{mol}^{-1}$   $[b] = \text{L}^3$

2.  $\omega = (\text{some number}) \sqrt{\frac{Gm}{r^3}}$ .

## PART - III

1. (ABC) 2. (ABD) 3. (ABC)

## PART - IV

1. (B)      2. (B)      3. (D)

### EXERCISE-3

## PART - I

1.  $(A \rightarrow (p), (q)) ; (B \rightarrow (r), (s)) ;$   
 $(C \rightarrow (r), (s)) ; (D \rightarrow (r), (s))$

2.	(C)	3.	3	4.	(ACD)
5.	(AC)	6.	(B)	7.	(C)
8.	(D)				

## PART - II

1. (4) 2. (2) 3. (2)  
4. (2)

